

AP Calculus Summer Packet

There are certain skills that have been taught to you over the previous years that are essential towards your success in AP Calculus. If you do not have these skills, you will find that you will consistently get problems incorrect next year, even though you may understand the calculus concepts. It is frustrating for students when they are tripped up by the algebra or trigonometry and not the calculus. This summer packet is intended for you to retain/review/relearn these topics. This packet can be found and printed off on my school web page.

Below is a list of several websites that may help you when you come across a difficult problem. If you are unsure of how to attempt these problems, please look online for help, or send me an email. Feel free to use all resources available to you via internet and textbooks. Please take these problems seriously. As stated before, students are weak in these skills and have a difficult time succeeding in calculus without them.

Work needs to be shown, when possible, in a neat, legible, organized manner. Do not always rely on your calculator. Half of your AP exam next year is taken without the calculator.

I believe you will benefit the most from this packet by starting it towards the end of June, beginning of July. You should try to complete a few problems each day, as if it was a daily journal. Do not do all of it now, and do not wait and do it a week before we start school in August. You are more likely to retain the information if you spread it out.

This summer assignment will be graded when you return. If you have any questions, please email me at Raymond.James@marion.k12.fl.us. I look forward to working with you next year.

Mr. James

Helpful Websites

<http://www.mathematicshelpcentral.com/index.html>

<http://www.mathtv.com/>

<http://archives.math.utk.edu/visual.calculus/>

Simplify using only positive exponents.

1. -3^{-x}

2. $-5\left(\frac{3}{2}\right) 4-9x^{-1/2} -9$

3. $2\left(\frac{2}{2-x}\right)\left[\frac{-2}{2-x^2}\right]$

4. $16x^2y^{3/4}$

5. $-\frac{x^{1/2}}{2}\sin\sqrt{x}$

6. $\frac{\sqrt{4x-16}}{\sqrt[4]{x-4}^3}$

7. $\frac{\frac{1}{2} 2x+5^{-3/2}}{\frac{3}{2}}$

8. $\left(\frac{1}{x^{-2}}+\frac{4}{x^{-1}y^{-1}}+\frac{1}{y^{-2}}\right)^{-1/2}$

Find the domain of the following functions. Make sure to use interval notation (ex: [0, 3)).

9. $y = \log 2x-12$

10. $y = \frac{x^2-4}{2x+4}$

11. $y = \frac{x^2-5x-6}{x^2-3x-18}$

12. $y = \frac{2^{2-x}}{x}$

13. $y = \sqrt{x-3}-\sqrt{x+3}$

14. $y = \frac{\sqrt{2x-9}}{2x+9}$

15. $y = \frac{x^2+8x+12}{\sqrt[4]{x+5}}$

16. $y = \sqrt{\tan x}$

17. $y = \sqrt{x^2-5x-14}$

18. $y = \frac{3x-2}{4x+1}$

19. $y = \frac{\sqrt[3]{x-6}}{\sqrt{x^2-x-30}}$

20. $y = \frac{x}{\cos x}$

Factor completely.

21. x^5+11x^3-80x

22. $x-3^2 2x+1^3 + x-3^3 2x+1^2$

23. $2x^2+50y^2-20xy$

Solve the following inequalities by factoring and making sign charts.

24. $x^2-16 > 0$

25. $x^2+6x-16 > 0$

26. $x^2-3x \leq 10$

27. $2x^2+5x \leq 3$

28. $x^3+4x^2-x \geq 4$

29. $2\sin^2 x \geq \sin x$

Describe, in words, the transformations that would take place to $f(x)$ in each of the following.

30. $f(x) - 4$

31. $f(x-4)$

32. $-f(x+2)$

33. $5f(x) + 3$

34. $f(2x)$

35. $|f(x)|$

Determine if each function is even, odd, or neither. Show all work.

36. $f(x) = 2x^2 - 7$

37. $f(x) = -4x^3 - 2x$

38. $f(x) = 4x^2 - 4x + 4$

39. $f(x) = x - \frac{1}{x}$

Solve each equation by factoring, graphing, or using the quadratic formula.

40. $7x^2 - 3x = 0$

41. $4x(x-2) - 5x(x-1) = 2$

42. $x^2 + 6x + 4 = 0$

43. $2x^2 - 3x + 3 = 0$

44. $2x^2 - (x+2)(x-3) = 12$

45. $x + \frac{1}{x} = \frac{13}{6}$

46. $x^4 - 9x^2 + 8 = 0$

47. $x - 10\sqrt{x} + 9 = 0$

48. $\frac{1}{x^2} - \frac{1}{x} = 6$

Find the equations of all vertical ($x = ?$) and horizontal ($y = ?$) asymptotes (if they exist).

49. $y = \frac{x}{x-3}$

50. $y = \frac{x+4}{x^2-1}$

51. $y = \frac{x+4}{x^2+1}$

52. $y = \frac{x^2-9}{x^3+3x^2-18x}$

53. $y = \frac{2x^3}{x^3-1}$

54. $y = \frac{\sqrt{x}}{2x^2-10}$

Simplify the following.

55. $\frac{x}{x - \frac{1}{2}}$

56. $\frac{\frac{1}{x} + 4}{\frac{1}{x} - 2}$

57. $\frac{x - \frac{1}{x}}{x + \frac{1}{x}}$

58. $\frac{\frac{x^2 - y^2}{xy}}{\frac{x+y}{y}}$

59. $\frac{x^{-3} - x}{x^2 - 1}$

60. $\frac{\frac{x}{1-x} + \frac{1+x}{x}}{\frac{1-x}{x} + \frac{x}{1+x}}$

If $f(x) = x^2$, $g(x) = 2x - 1$, and $h(x) = 2^x$, find the following.

61. $f \circ g(2)$

62. $g \circ f(2)$

63. $f \circ h(-1)$

64. $g\left(f\left(h\left(\frac{1}{2}\right)\right)\right)$

Solve each equation.

65. $\frac{2}{3} - \frac{5}{6} = \frac{1}{x}$

66. $x + \frac{6}{x} = 5$

67. $\frac{x+1}{3} - \frac{x-1}{2} = 1$

68. $\frac{2}{x+5} + \frac{1}{x-5} = \frac{16}{x^2-25}$

69. $\frac{60}{x} - \frac{60}{x-5} = \frac{2}{x}$

70. $\frac{x-5}{x+1} = \frac{3}{5}$

Solve each equation on the interval $[0, 2\pi)$. Give exact values (ex: $\frac{\pi}{3}$) if possible.

71. $\sin x = \frac{1}{2}$

72. $\cos^2 x = \cos x$

73. $2\cos x + \sqrt{3} = 0$

74. $4\sin^2 x = 1$

75. $2\sin^2 x + \sin x = 1$

76. $\cos^2 x + 2\cos x = 3$

77. $2\sin x \cos x + \sin x = 0$

78. $8\cos^2 x - 2\cos x = 1$

79. $\sin^2 x - \cos^2 x = 0$

Answer the following questions over a variety of topics.

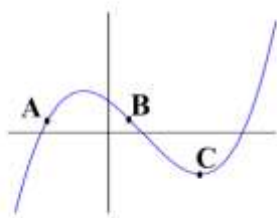
80. Let f be a linear function where $f(2) = -5$ and $f(-3) = 1$. Find $f(x)$.

81. Find an equation for the line, in point-slope form, that contains $(5, 1)$ and is perpendicular to $6x - 3y = 2$.

82. Use the table to calculate the average rate of change from $t = 1$ to $t = 4$.

t	0	1	2	3	4
$x(t)$	8	7	5	1	2

83. Order the points A, B, and C, from least to greatest, by their rates of change.



84. Find the distance between the points $(8, -1)$ and $(-4, -6)$.

85. If $g(x) = \frac{x}{x+3}$, find $g^{-1}(x)$ (the inverse of g).

86. Find the points of intersection in the graphs of $y = x - 1$ and $y^2 = 2x + 6$.

87. Rewrite $\frac{1}{2} \ln|x-3| + \ln|x+2| - 6 \ln|x|$ as a single logarithmic expression.

88. Evaluate the following.

a) $\sin\left(\frac{7\pi}{6}\right)$

b) $\csc 60^\circ$

c) $\cos 120^\circ$

d) $\sec\left(-\frac{2\pi}{3}\right)$

e) $\tan\left(\frac{\pi}{2}\right)$

f) $\cot -135^\circ$

89. Sketch a graph of the piecewise function $f(x) = \begin{cases} x^2 - 5, & x < -1 \\ 0, & x = -1 \\ 6 - 4x, & x > -1 \end{cases}$.

90. Describe the left and right end-behavior of the function $f(x) = -3^x$.

91. Find the domain and range of each function (without a calculator if possible).

a) $f(x) = x - 3^2 + 2$

b) $f(x) = 2|x - 4| - 3$

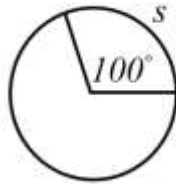
c) $f(x) = \sqrt[3]{1 - x}$

d) $f(x) = 5 \sin x$

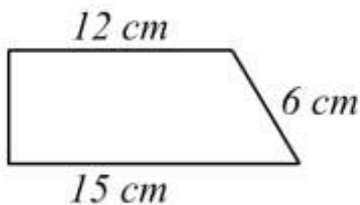
e) $f(x) = \tan\left(x - \frac{\pi}{4}\right)$

f) $f(x) = e^{-x}$

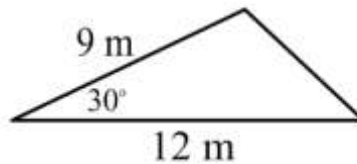
92. The circle below has a radius of 6 ft. Find the area and circumference of the circle, then find s .



93. Find the area of the trapezoid.



94. Find the missing sides and angles of the triangle. Then find its area.

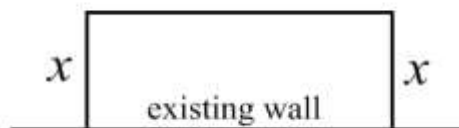


95. Find the volume of a washer with outer radius of 18 ft., inner radius of 15 ft., and height of 3 ft.



96. Rewrite $\log_5(x + 3)$ into an equivalent expression using only natural logarithms.

97. Three sides of a fence and an existing wall form a rectangular enclosure. The total length of fence used for the three sides is 240 ft. Find x if the area enclosed is 5500 ft^2 .



98. The number of elk after t years in a state park is modeled by the function $P(t) = \frac{1216}{1 + 75e^{-0.03t}}$.

- a) What was the initial population?
- b) When will the number of elk be 750?
- c) What is the maximum number of elk possible in the park?

99. Simplify $\csc x - \tan x \sin x \cos x$.

100. Use long division, or synthetic division, to rewrite the expression $\frac{x^3 - 7x^2 + 14x - 8}{x - 4}$.

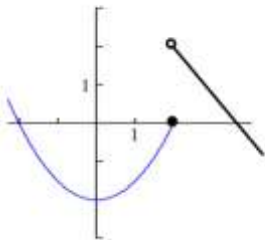
101. Rewrite $y = -3x^2 - 24x + 11$ in vertex form $y = a(x - k)^2 + h$ by completing the square.

102. Sketch a graph of the piecewise function $f(x) = \begin{cases} -x^2, & -2 \leq x < 1 \\ -2, & x = 1 \\ 3x + 5, & 1 < x \leq 3 \end{cases}$.

103. Use a graphing calculator to solve $e^{2x} = 3x^2$.

104. Do the lines $-x + 5y = 22$ and $7x - 2y = 19$ intersect?

105. The function $f(x)$ is graphed below. Find the following.



- a) $f(2)$
- b) $f(0)$
- c) $f(x) = 0$
- d) $\lim_{x \rightarrow 2^+} f(x)$
- e) $\lim_{x \rightarrow 2^-} f(x)$
- f) $\lim_{x \rightarrow 2} f(x)$

106. Find the following limits.

- a) $\lim_{x \rightarrow 3} |7x + 9|$
- b) $\lim_{x \rightarrow 3^+} \left(\frac{x^2 + 4}{x - 3} - \frac{1}{x - 8} \right)$
- c) $\lim_{x \rightarrow \infty} \sin\left(\frac{3\pi x + 1}{4x + 5}\right)$
- d) $\lim_{x \rightarrow \infty} 4 \cos x$
- e) $\lim_{x \rightarrow \infty} \left(\frac{3 - x}{x^3 + 2x + 1} - \frac{6 - x}{x^3 + 2x + 1} \right)$
- f) $\lim_{x \rightarrow 0} \left(\frac{2x}{\tan 2x} \right)$
- g) $\lim_{x \rightarrow 0} \left(\frac{\sqrt{x + 9} - 3}{x} \right)$
- h) $\lim_{x \rightarrow 2} h(x)$ where $h(x) = \begin{cases} 4x - 3, & x \leq 2 \\ x^2 + 5, & x > 2 \end{cases}$